



Nom : .....

Date : .....


**1. Indique sous chaque carré la fraction correspondant à la partie coloriée.**



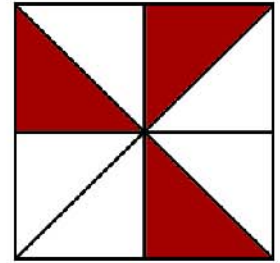
.....




.....




.....




.....




.....



.....




.....

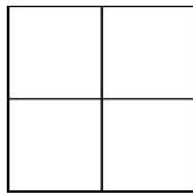


.....

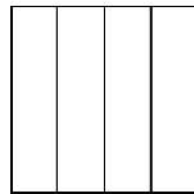
**2. Colorie la partie qui correspond à la fraction notée sous chaque carré :**



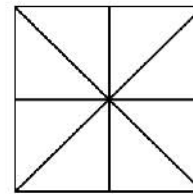
$$\frac{1}{2}$$



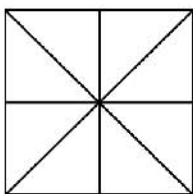
$$\frac{3}{4}$$



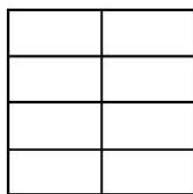
$$\frac{1}{4}$$



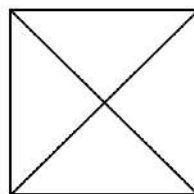
$$\frac{4}{8}$$



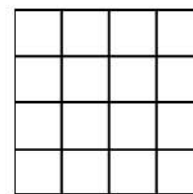
$$\frac{3}{4}$$



$$\frac{6}{8}$$



$$\frac{2}{4}$$



$$\frac{8}{16}$$