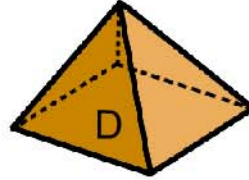
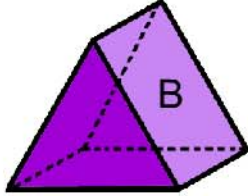
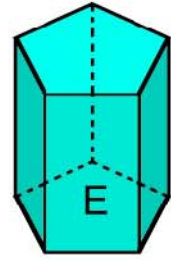
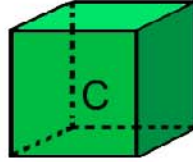
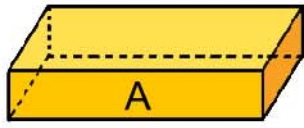


Nom : .....

Date : .....

1) Observe bien ces solides puis complète le tableau.



Solides	Nombre de faces	Nombre de sommets	Nombre d'arêtes
A	.....	.....	.....
B	.....	.....	.....
C	.....	.....	.....
D	.....	.....	.....
E	.....	.....	.....

2) Reproduis le solide ci-dessous en te servant des points.

