
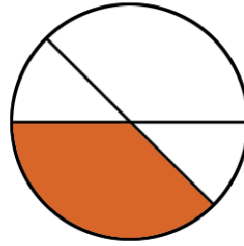
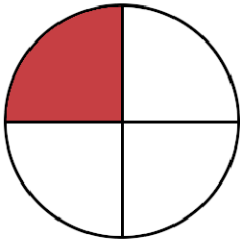


Nom :

Date :

1. Les figures ci-dessous sont partagées en 4. Indique celles dont la partie coloriée représente $\frac{1}{4}$ de la figure.

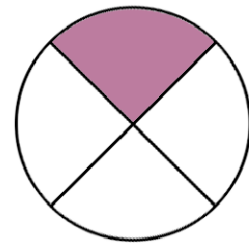
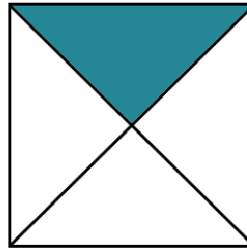
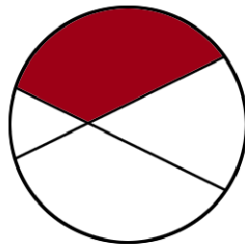
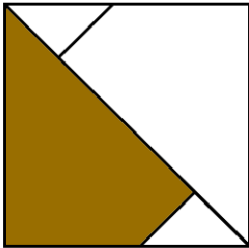


.....

.....

.....

.....



.....

.....

.....

.....

2. Écris la fraction qui correspond à la partie coloriée de la bande :




a :



b :



c :



d :



e :



f :